



1 $y = mx + b$


2  $m = \frac{1}{4}x$

3 $y = mx + b \{ 2 \leq x \leq 4 \}$

4

 $m = \frac{8}{2}x$


5

 $b = 10$


6

$y = mx + b$

7

 $m = \frac{6}{2}x$


8

 $b = -7.5$

9

$y = mx + b$


10

 $m = \frac{23}{4}x$

11

$y = mx + b$


12

 $m = \frac{24}{3}x$

13

$y = mx + b$


14

 $m = \frac{77}{6}x$

15

$y = mx + b$


16

 $m = \frac{55}{6}x$

17

$y = mx + b$


18

 $m = \frac{44}{9}x$

19

$y = mx + b$


20

 $m = \frac{83}{2}x$

21

$y = mx + b$


22

 $m = \frac{74}{8}x$

23

$y = mx + b$


24

 $m = \frac{72}{4}x$


25

$y = 5$


26

 $y = 4$


27

 $y = 3$


28

 $y = 2$


29

 $y = 1$


30

 $y = 0$


31

 $y = -1$


32

 $y = -2$

33

 $y = -3$

34

 $y = -4$